

**Paper Reference 4IT1/01R
Pearson Edexcel
International GCSE (9 – 1)**

**INFORMATION AND COMMUNICATION TECHNOLOGY
PAPER 1: WRITTEN PAPER**

Monday 13 May 2019 – Morning

**TIME: 1 hour 30 minutes plus your additional
time allowance**

Data Booklet

Contents:

Picture – People using technology devices.

Q1 (i) – Blank space to draw diagram.

Q2 (c) – Figure 1.

Q4 (a) (i) – Table: Complete the table.


Smartphones



(Source: © Pearson Asset Library)

Question 1 (i)

Blank space to draw diagram.

A large, empty rectangular box with a thin black border, intended for drawing a diagram. It occupies the majority of the page below the text instructions.

Question 2 (c)

Figure 1

Webpage shown on Zara's tablet computer.

Paypal - Log In - Internet Browser

⏮ ⏭

http://www.user-paypal.com/log-in-run

⏮ ⏭

File Edit View Favourites Tools Help


★

+

🏠

🖨

>>



[Help](#) | [Security Center](#)

Search


Home

Personal

Business

Products & Services

Member Log In

Secure Log In 

Registered users log in here. Be sure to protect your password.

Email Address:

[Forgot your password?](#)

New users [sign up here!](#) It only takes a minute.

Log In

[About](#) | [Accounts](#) | [Fees](#) | [Privacy](#) | [Security Center](#) | [User Agreement](#) | [Developers](#) | [Referrals](#)

Copyright © 1999-2018. All rights reserved.

🔍 100%

Question 4 (a) (i)

Complete the table.

PROPERTY	POSITIVE EFFECT
Relevance	
Age	
Reliability	